

#Jenny



Finally I get this ebook, thanks for all these I can get now!

#Rio



Cool! I'am really happy

#Markus Jensen



I did not think that this would work, my best friend showed me this website, and it does! I get my most wanted eBook

#Hun Tsu



wtf this great ebook for free?!

#Che Salsa



My friends are so mad that they do not know how I have all the high quality ebook which they do not!

#Diego Butler




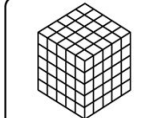
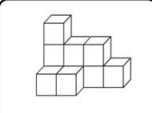
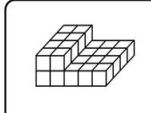
so many fake sites. this is the first one which worked! Many thanks

Name: \_\_\_\_\_

**Volume**

Volume is the amount of 3-dimensional space an object occupies.

**Directions:** Look at the 3-dimensional shapes below. Each is filled with cubes which represent the shape's volume. Think about how many cubes actually comprise the space. Write the volume of each shape.

 <p>The volume of the shape is _____ cubic cm.</p>	 <p>The volume of the shape is _____ cubic mm.</p>
 <p>The volume of the shape is _____ cubic ft.</p>	 <p>The volume of the shape is _____ cubic in.</p>

© www.HaveFunTeaching.com

[Download PDF version of :](#)  
**Worksheets That Teach Algebra 1 Volume Iii**